




Maths




Please complete these fraction problems.




Year 3 Fraction Problems

Answer the following questions.

Helpful hint: Drawing diagrams may help you.

<p>1. Billy ate $\frac{3}{5}$ of a pizza and Bob ate $\frac{4}{5}$ of a pizza. Who ate the most?</p> 	<p>2. Philomena had $\frac{1}{3}$ of her chocolate bar remaining and Daphne had $\frac{1}{4}$. Who had most left?</p> 	<p>3. What comes next? One tenth, two tenths, ...</p> 

<p>4. A running track is $\frac{1}{4}$ of a km long. How far would a runner go if he ran round the track 4 times?</p> 	<p>5. Hamza chopped up a pineapple and gave $\frac{1}{2}$ to his mum. He also ate half himself. How much was left to give to his dad?</p> 	<p>6. Miriam's dad offered a choice for her pocket money – have $\frac{1}{4}$ of £5 or $\frac{1}{2}$ of £5. Which should she choose?</p> 

<p>7. Terry wanted to buy a football shirt in the sale. One shop was offering $\frac{1}{3}$ off the price, another shop was offering $\frac{1}{2}$ price. Which is the better deal?</p> 	<p>8. Danyal used $\frac{4}{7}$ of the milk for his cereal. What fraction was left for his brother?</p> 	<p>9. Peter ate $\frac{1}{2}$ of his bar of chocolate, Damian ate $\frac{2}{4}$ of his bar of chocolate and Polly ate $\frac{3}{6}$ of her bar of chocolate. Who had the most remaining?</p> 


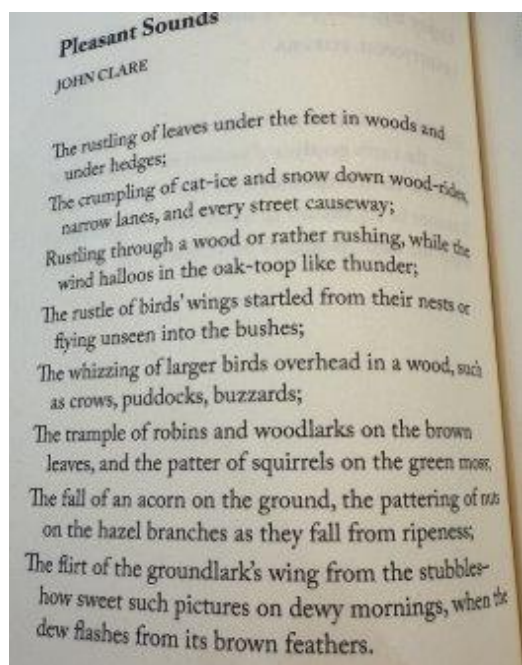
English -

1. Read the poem
2. What sounds can you find in the poem?
3. Write 3-4 sentences describing the sounds you find in 1st person- can you include a subordinate conjunction?

Example -

I pause and listen **while** bird wings whizz above my head.









As the leaves rustle under my feet, I slow my steps.



Science


Can you find different objects in your house - do they change shape?

- Can you squash it?
- Can you bend it?
- Can you twist it?
- Can you stretch it?

Object	Can You Squash It?	Can You Bend It?	Can You Twist It?	Can You Stretch It?
plastic bottle 				
pipe cleaner 				
sock 				
drinking straw 				
modelling dough 				
bath towel 				
sponge 				
elastic band 				

Art

- Make a view finder - image shown below
- Pick one of Eric's paintings and focus your attention on a particular area of his painting
- Have a go with pencils or if you have them watercolours painting what you see through the view finder - focus on the colours!



My example:



